


Word Problem Round-Up: Addition #3


When we add, we find the total of two or more numbers.

$$2 + 3 = 5$$




Directions: Read each problem and solve. Write the answer in the box.


1. Jen has 5 .

She got 6 more .

How many  does she have now?


$$\begin{array}{r} 5 \\ + 6 \\ \hline \square \end{array}$$


2. Ricky found 8 .

Denise found 6 .

How many  did they find in all?


$$\begin{array}{r} 8 \\ + 6 \\ \hline \square \end{array}$$


3. Mateo has 6 toy .

Camila has 4 toy .

How many  do they have in all?

$$\begin{array}{r} 6 \\ + 4 \\ \hline \square \end{array}$$

4. Hakeem has 7 .

His mother gave him 5 more .

How many  does he have now?

$$\begin{array}{r} 7 \\ + 5 \\ \hline \square \end{array}$$