

## Word Problems: Addition

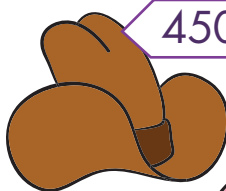
Let's read these problems. Write a number sentence and solve.




509



859



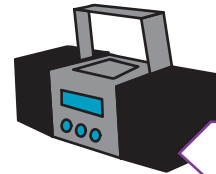
450



322



276



950



632

Lea bought a cap and a teddy bear. How many tokens did Lea spend?

\_\_\_\_\_

Matt bought 2 cowboy hats. How many tokens did Matt spend?

\_\_\_\_\_

Jill bought a necklace and a doll. How many tokens did she spend?

\_\_\_\_\_

Sean bought a radio and a teddy bear. How many tokens did he spend?

\_\_\_\_\_

Drew bought 2 radios. How many tokens did he spend?

\_\_\_\_\_

May bought headphones and a cap. How many tokens did she spend?

\_\_\_\_\_

Who spent the most tokens of all the kids?

\_\_\_\_\_

Who spent the least amount of tokens of all the kids?

\_\_\_\_\_