

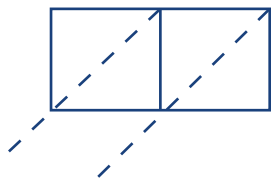


Lattice Multiplication Practice

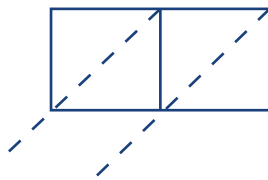


Let's practice some lattice multiplication.

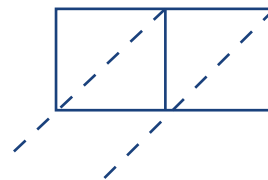
1 $11 \times 4 = \underline{\hspace{2cm}}$



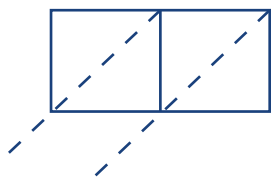
2 $20 \times 2 = \underline{\hspace{2cm}}$



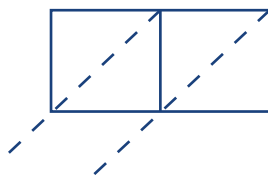
3 $33 \times 3 = \underline{\hspace{2cm}}$



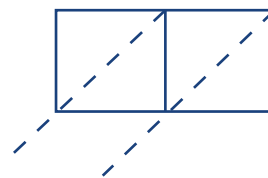
4 $22 \times 5 = \underline{\hspace{2cm}}$



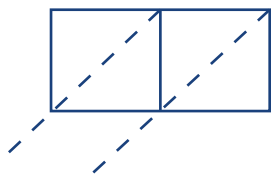
5 $67 \times 2 = \underline{\hspace{2cm}}$



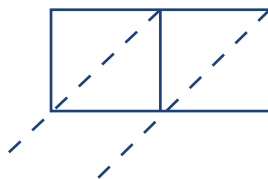
7 $45 \times 6 = \underline{\hspace{2cm}}$



7 $53 \times 9 = \underline{\hspace{2cm}}$



8 $79 \times 8 = \underline{\hspace{2cm}}$



9 $39 \times 7 = \underline{\hspace{2cm}}$

