


WHICH ONE IS LONGER?

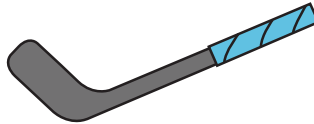
Order each row of objects from shortest to longest.
Write "1" under the shortest item. Write "3" under the longest item.






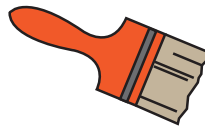




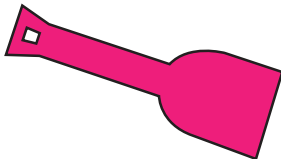




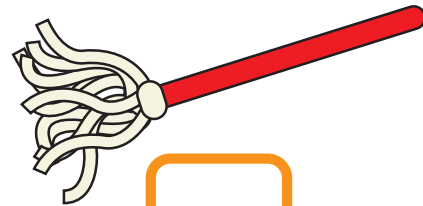












Challenge Draw an object that you think is longer than the one below!

