






Which is Taller?

Order each column of objects from shortest to tallest.

Write "1" under the shortest item. Write "3" under the tallest item.



Challenge:

Draw an object that you think is taller than the one below!

