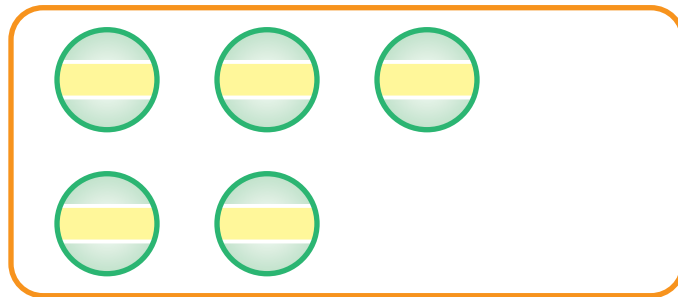


Odds & Evens

There are an **ODD** number of objects in each set below.
Count them and write the amount.

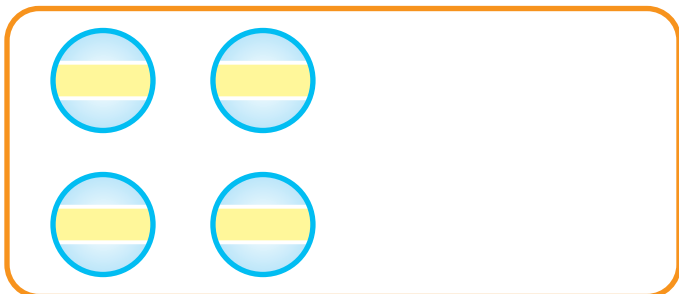


___ Stars



___ Balls

There are an **EVEN** number of objects in each set below.
Count them and write the amount.



___ Balls

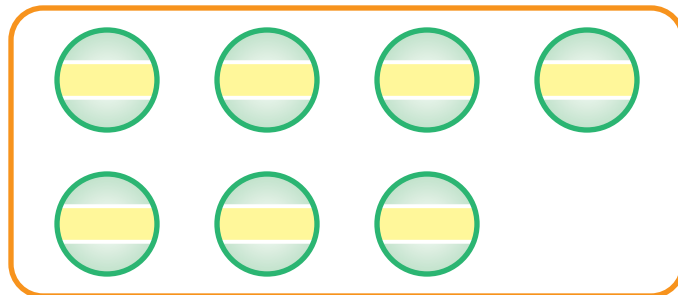


___ Stars

Count the number of objects in each set below.
Then write the amount and circle **ODD** or **EVEN**.



___ **ODD** **EVEN**



___ **ODD** **EVEN**