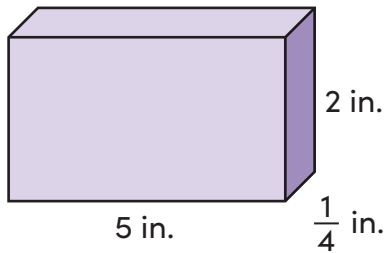


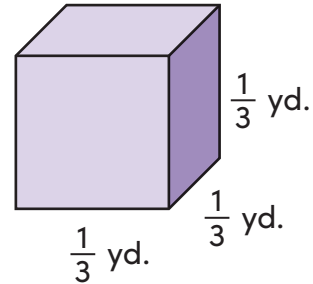
Volume of Rectangular Prisms and Cubes With Fractions

Find the volume of each rectangular prism. Write your answer as a fraction or mixed number in simplest form. Remember the volume formula!

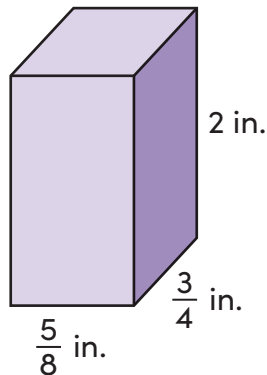
$$\text{Volume} = \text{length} \times \text{width} \times \text{height}$$



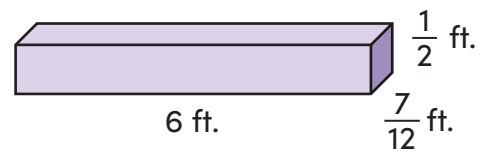
Volume = _____



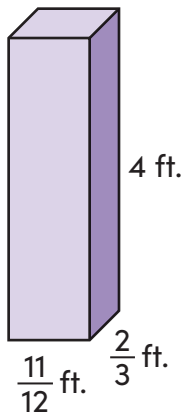
Volume = _____



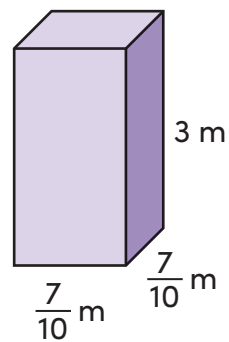
Volume = _____



Volume = _____



Volume = _____



Volume = _____