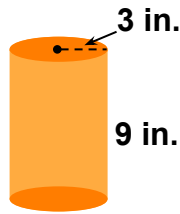


Volume of Cylinders, Cones, and Spheres #1

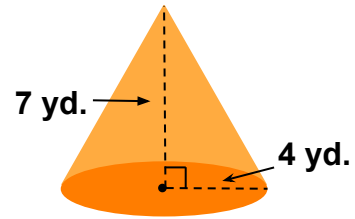
Calculate the volume of each figure. Use 3.14 for π . Round your answer to the nearest hundredth if needed.

1.



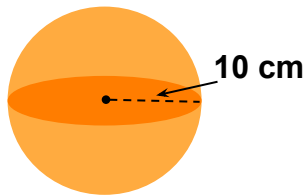
$V \approx$ _____

2.



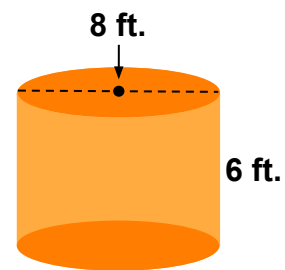
$V \approx$ _____

3.



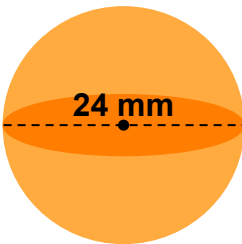
$V \approx$ _____

4.



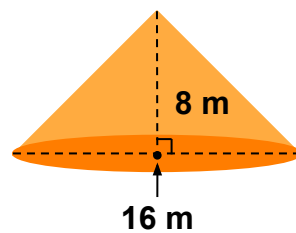
$V \approx$ _____

5.



$V \approx$ _____

6.



$V \approx$ _____