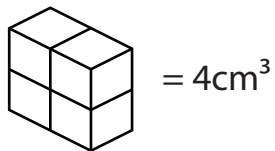


Name: _____

Date: _____

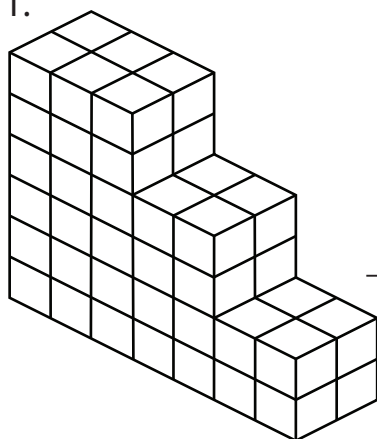
Volume Cubed # 3

Volume is the measure of space inside of a solid object.
Volume is measured in **cubic units (cm³)**.



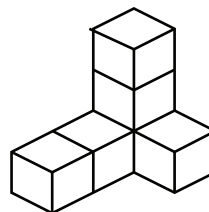
Directions: Count the number of centimeter cubes to find the volume of the objects.

1.



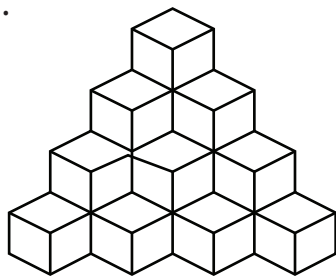
_____ = Volume

2.



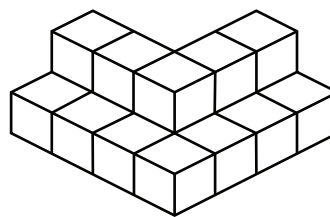
_____ = Volume

3.



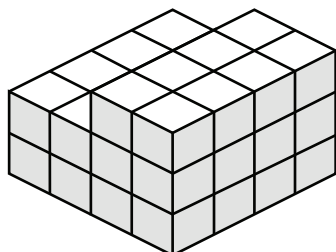
_____ = Volume

4.



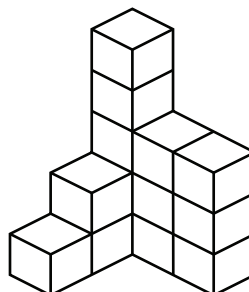
_____ = Volume

5.



_____ = Volume

6.



_____ = Volume