





Valentine's Day Math



Count the pictures and place the value in the space provided.
Then complete the addition equation.



+




=



+



=



+



=



+



=
