



# VALENTINE'S DAY Simple Subtraction

Cross out 4 roses to find out how many are left.




$$5 - 4 = \begin{array}{l} \text{---} \\ \text{---} \\ \text{---} \end{array}$$

Cross out 2 cards to find out how many are left.



$$3 - 2 = \begin{array}{l} \text{---} \\ \text{---} \\ \text{---} \end{array}$$

Cross out 1 heart to find out how many are left.



$$4 - 1 = \begin{array}{l} \text{---} \\ \text{---} \\ \text{---} \end{array}$$