




Grade 1


# Valentine Math


Add the numbers. Use the chocolate kisses to help you count!


$$\begin{array}{r} 1. \quad 3 \\ + 6 \\ \hline \end{array}$$



$$\begin{array}{r} 2. \quad 7 \\ + 1 \\ \hline \end{array}$$



$$\begin{array}{r} 3. \quad 1 \\ + 8 \\ \hline \end{array}$$



$$\begin{array}{r} 4. \quad 5 \\ + 3 \\ \hline \end{array}$$



$$\begin{array}{r} 5. \quad 1 \\ + 3 \\ \hline \end{array}$$



$$\begin{array}{r} 6. \quad 4 \\ + 3 \\ \hline \end{array}$$


$$\begin{array}{r} 7. \quad 3 \\ + 3 \\ \hline \end{array}$$


$$\begin{array}{r} 8. \quad 5 \\ + 2 \\ \hline \end{array}$$


$$\begin{array}{r} 9. \quad 2 \\ + 3 \\ \hline \end{array}$$


$$\begin{array}{r} 10. \quad 1 \\ + 5 \\ \hline \end{array}$$


$$\begin{array}{r} 11. \quad 1 \\ + 4 \\ \hline \end{array}$$


$$\begin{array}{r} 12. \quad 2 \\ + 1 \\ \hline \end{array}$$
