
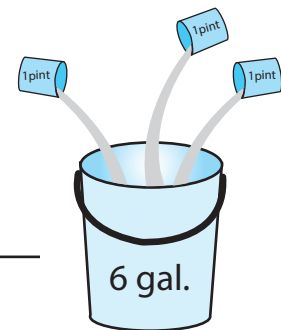



Measurement Conversion

Solve each problem.

1. Which weighs more, 4 tons or 4,000 kilograms? _____
2. My kite flew 30 meters. How high is that in centimeters? _____
3. Sarah is now 5 feet tall. What is her height in inches? _____
4. How many pints of water is needed to fill a 6-gallon bucket? _____
5. What metric unit are you going to use to measure the liquid volume in a spoon? _____
6. About how many centimeters equals 9 inches? _____
7. How many cups are in 3 quarts? _____
8. Which is heavier, 5 ounces or 5 grams? _____



4 tons



4,000 kgs.