


Name: _____

Date: _____

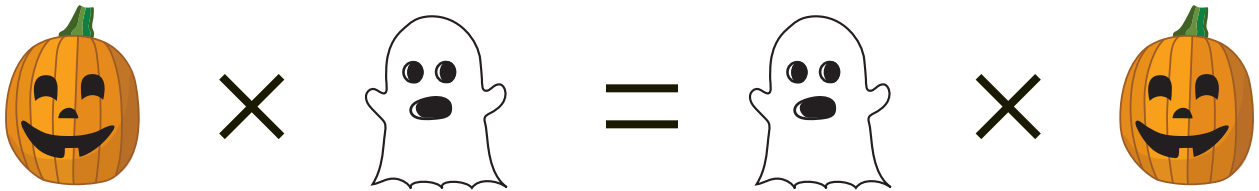
Two Truths and One Lie: Halloween Edition

Directions:

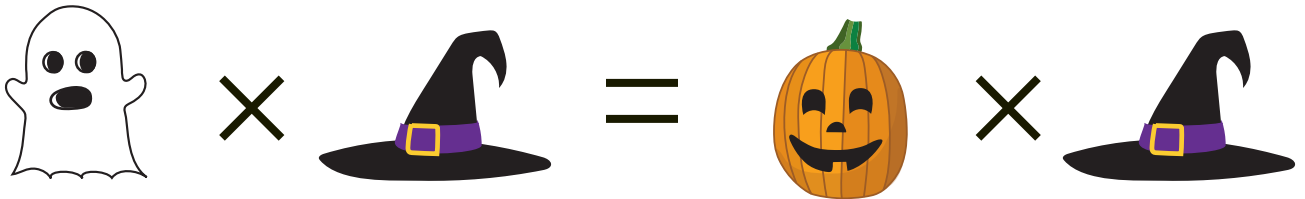
Solve the three equations. Determine which two are true and which one is a lie. Explain your answer to a partner or group by drawing on information from the equations.



A.



B.



C.



1. Which equations are true? _____ and _____

2. Which equation is a lie? _____ How do you know? _____
