



Name: _____

Date: _____



Two-Digit Word Problem Check-in




Choose a strategy and solve. Show your work.


Problem	Work Space	Answer
1) Ms. Riley had \$84 to spend on new nonfiction books for the school library. She bought books about animals for \$36. How much does she have left?		
2) There were 89 students in second grade at Lynnwood School last year. This year there are 17 fewer kids. How many kids are in second grade at Lynnwood School this year?		
3) Mr. Brandon's class planted 73 tomato seeds and 19 pepper seeds. How many seeds did they plant in all?		
4) Marcus had \$57 saved in his bank. He spent \$26 on a game. How much is left in his bank?		

Name: _____

Date: _____



Two-Digit Word Problem Check-in



Choose a strategy and solve. Show your work.

Problem	Work Space	Answer
5) There were 92 pieces of chocolate in a bag. Sophia and her friends shared 13 pieces. How many were left in the bag?		
6) 45 kids walked to the park for the ice cream social while 32 kids rode their bikes. How many kids went to the ice cream social?		
7) Ms. Riley had 67 graphic novels in the library. She bought 26 more at the Spring Book Fair. How many graphic novels are in the library now?		
8) 92 kids went to the spring talent show. 23 were performing. How many kids were audience members?		