




Using Base 10 Drawings In Two-Digit Addition

Draw pictures to help you solve the two-digit addition problems.

Example:

$45 + 32$

45	32
	
	

$45 + 32 = \underline{\quad 77 \quad}$

Now you try!

$62 + 21$

62	21

$62 + 21 = \underline{\quad \quad \quad}$