

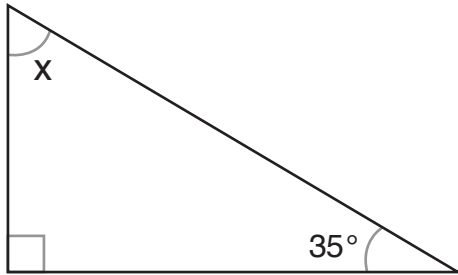
Name: _____

Date: _____

TRI-ANGLES

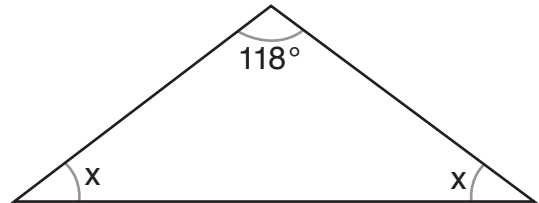
Use addition and subtraction to find the missing angle measurements.
Remember: The sum of the angles in a triangle is always 180 degrees.

1.



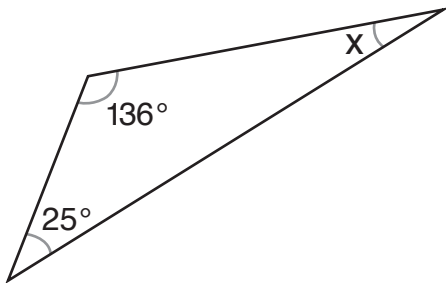
$x =$ _____

2.



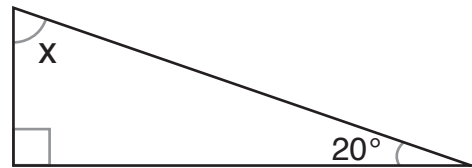
$x =$ _____

3.



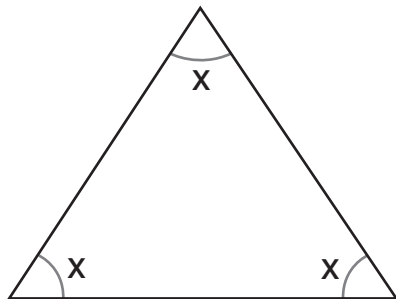
$x =$ _____

4.



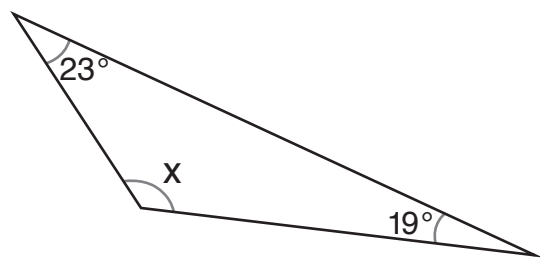
$x =$ _____

5.



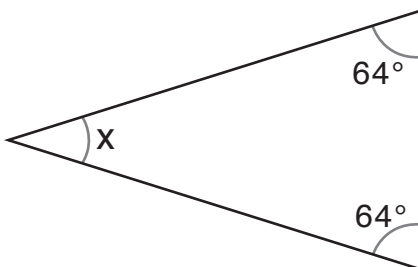
$x =$ _____

6.



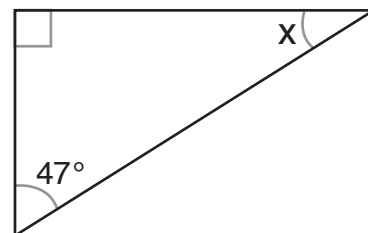
$x =$ _____

7.



$x =$ _____

8.



$x =$ _____