


# Tree Bonds


**Directions:** Write the missing numbers on the trees to make each number bond true. Then fill in the sum for each equation.

1.




$5 + 1 = \underline{\quad}$

2.




$0 + 3 = \underline{\quad}$

3.




$2 + 3 = \underline{\quad}$

4.




$1 + 4 = \underline{\quad}$

5.



$2 + 0 = \underline{\quad}$

6.



$1 + 1 = \underline{\quad}$