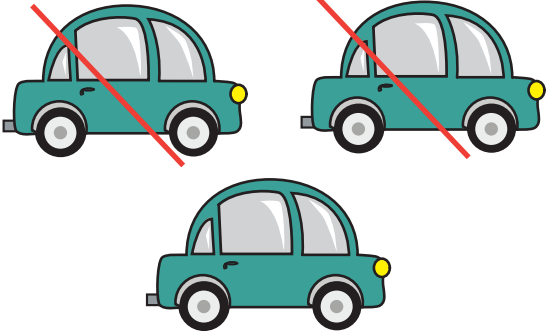
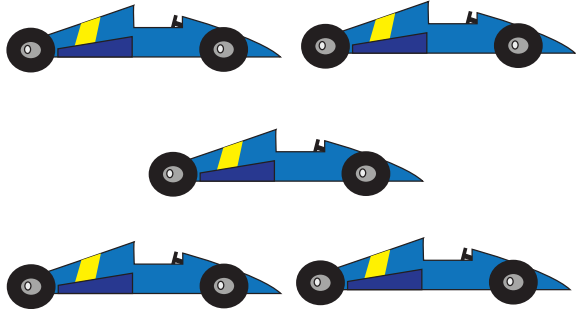

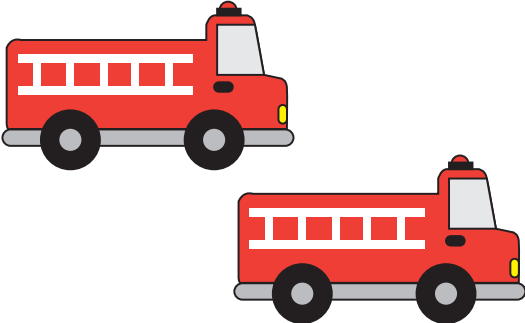


Name: _____

Date: _____

Travel Subtraction

Count and cross out the cars according to the directions. Then write down the numbers and subtract. See the example.

	<p>How many cars are there?</p>	<p>3</p>
	<p>Cross out 2 cars.</p>	$\begin{array}{r} - 2 \\ \hline \end{array}$
	<p>How many cars are left?</p>	<p>1</p>
	<p>How many race cars are there?</p>	
	<p>Cross out 1 race car.</p>	<p>—</p>
	<p>How many race cars are left?</p>	
	<p>How many taxis are there?</p>	
	<p>Cross out 2 taxis.</p>	<p>—</p>
	<p>How many taxis are left?</p>	
	<p>How many fire trucks are there?</p>	
	<p>Cross out 1 fire truck.</p>	<p>—</p>
	<p>How many fire trucks are left?</p>	