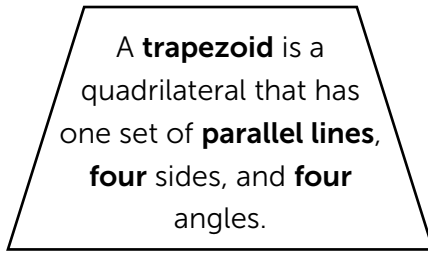
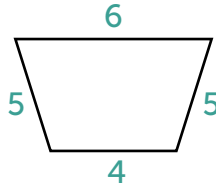


Trapezoid Perimeters



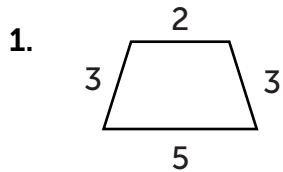
To find the **perimeter** of a trapezoid, add up the lengths of each side.



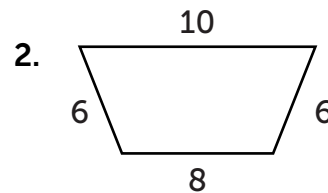
$$6 + 5 + 5 + 4 = \mathbf{20 \text{ units}}$$



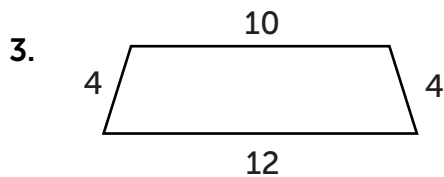
Directions: Find the perimeter of the trapezoids.



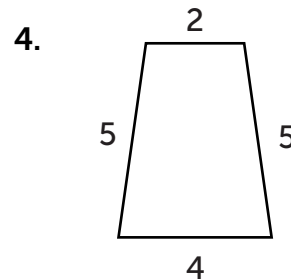
Perimeter: _____ units



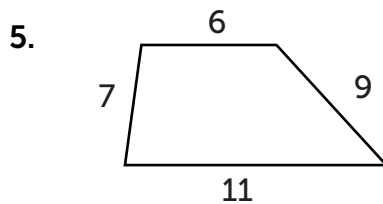
Perimeter: _____ units



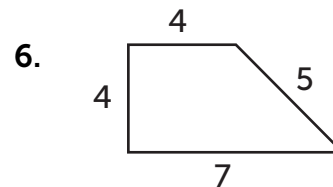
Perimeter: _____ units



Perimeter: _____ units



Perimeter: _____ units



Perimeter: _____ units

Challenge: Draw a trapezoid in the space below. Label the lengths of the sides and find the perimeter.