
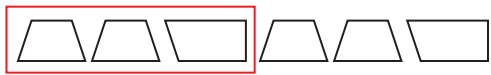



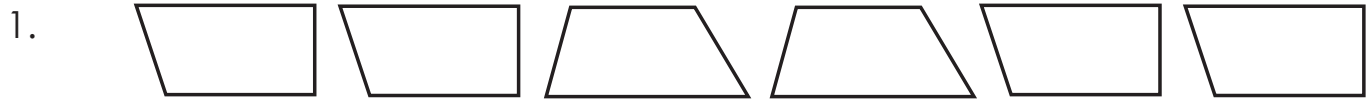
Name: \_\_\_\_\_

Date: \_\_\_\_\_

# Trapezoid Patterns

<p>A <b>trapezoid</b> is a four-sided shape that has a pair of parallel sides.</p> 	<p><b>Repeated patterns</b> have a part or whole that repeats over and over.</p>	<p>Notice the repeated pattern.</p> 	<p>What's the next shape in the pattern?</p> 
--	--	--	--

**Directions:** Look at the trapezoid patterns, and circle the repeated pattern. Then, follow the additional directions in each problem.



Create your own repeated pattern with two different trapezoids.



Create your own repeated pattern with three different trapezoids.



Describe the shape pattern. What is the repeated pattern and how would you continue the pattern?

---

---

---