



# Time on Your Side #10

Circle the clock below that shows 6:57.




The time is \_\_\_\_\_.



Show 10:12 on the clock.

Ryan plays at the arcade from 12:20 p.m. until 2:10 p.m. His friend Lily plays from 1:35 p.m. until 3:15 p.m. Who spent LESS time at the arcade?

Show the current time.



What time is it? \_\_\_\_\_