



Name _____ Date _____



Calculate Elapsed Time #2

Read the analog clocks and write the time in digital form. Then answer the questions.

Start	End	Time Elapsed
-------	-----	--------------





hours and
minutes



hours and
minutes

Draw hands on the clocks to match the sentence:
Célia started fixing her car at 1:00 p.m. She finished at 5:55 p.m.



How much time elapsed?

hours and
minutes