







Calculate Elapsed Time #1

Read the analog clocks and write the time in digital form. Then answer the questions.

| Start | End | Time Elapsed |
|--|---|---|
|  <div style="display: inline-block; border: 1px dashed red; width: 100px; height: 40px; vertical-align: middle; margin-left: 10px;"></div> |  <div style="display: inline-block; border: 1px dashed red; width: 100px; height: 40px; vertical-align: middle; margin-left: 10px;"></div> | <div style="display: inline-block; border: 1px dashed red; width: 100px; height: 40px; vertical-align: middle; margin-bottom: 5px;"></div> <p style="text-align: center;">minutes</p> |
|  <div style="display: inline-block; border: 1px dashed red; width: 100px; height: 40px; vertical-align: middle; margin-left: 10px;"></div> |  <div style="display: inline-block; border: 1px dashed red; width: 100px; height: 40px; vertical-align: middle; margin-left: 10px;"></div> | <div style="display: inline-block; border: 1px dashed red; width: 100px; height: 40px; vertical-align: middle; margin-bottom: 5px;"></div> <p style="text-align: center;">hours</p> |
| <p>Draw hands on the clocks to match the sentence: Kasemchai went to the fair at 8:00 p.m. and came home at 10:03 p.m.</p> <div style="display: flex; justify-content: space-around; align-items: center;">   </div> | | <p>How much time elapsed?</p> <div style="display: inline-block; border: 1px dashed red; width: 100px; height: 40px; vertical-align: middle; margin-bottom: 5px;"></div> <p style="text-align: center;">hours and minutes</p> |