

# TIME 2 TELL TIME


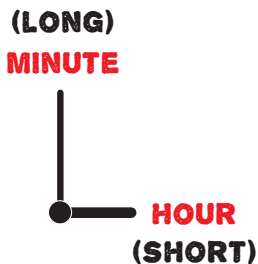
# 2

Can you tell what time it is?


Write down the time you see on each clock.

**EXAMPLE**


HOUR	MINUTE
10	20



\_\_\_\_ : \_\_\_\_




\_\_\_\_ : \_\_\_\_



\_\_\_\_ : \_\_\_\_



\_\_\_\_ : \_\_\_\_



\_\_\_\_ : \_\_\_\_