







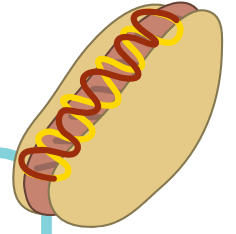
The BBQ

Look at the pictures from Katy's barbecue. Count and record the numbers of each kind of food in the tally chart on the next page.


Then answer the questions below.



The BBQ Tally Sheet



Type of Food	Tally	Total
Lemonade	//	2
Hot dogs		
Apples		
Watermelon		
Popsicles		
Grand Total:		



What food is the most common?

What food is the least common?

How many more popsicles than apples are there?

