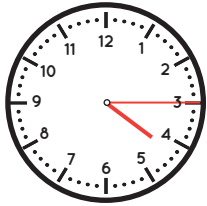


Name _____

Date _____

Telling Time Two Ways: Quarter Hour

Count by 5's to find the time. Write the time two ways:



1. Minutes after hour:

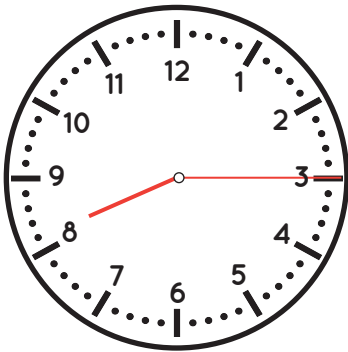
Fifteen minutes after four o'clock.

2. Numerically:

4:15



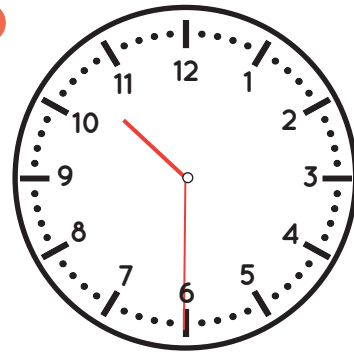
1.



___ minutes after ___ o'clock.

___ : ___

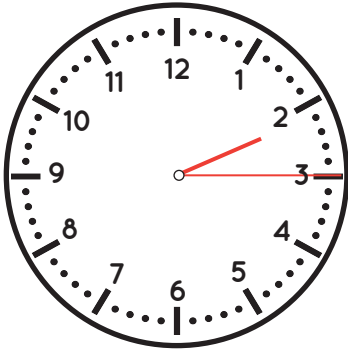
2.



___ minutes after ___ o'clock.

___ : ___

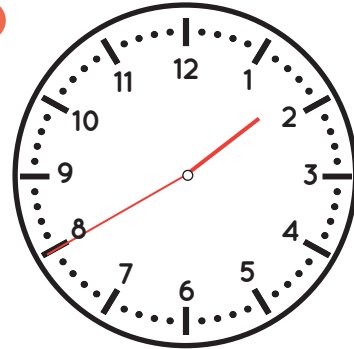
3.



___ minutes after ___ o'clock.

___ : ___

4.



___ minutes after ___ o'clock.

___ : ___