



# What time is it?



If the long hand is on the 12, it is a full hour.

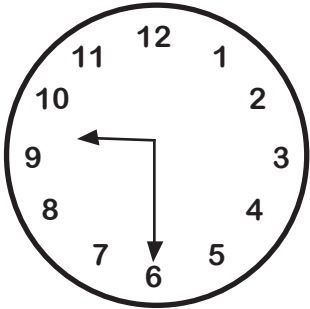
**2:00**




If the long hand is on the 6, it is half an hour.

**2:30**


For each clock below, write down the correct time. Is it a full hour or half an hour?




•  
•  
\_\_\_\_\_



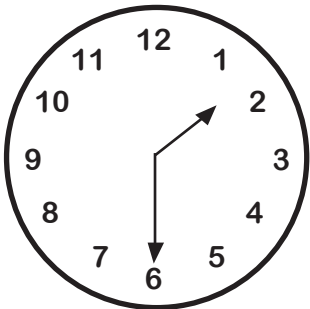
•  
•  
\_\_\_\_\_



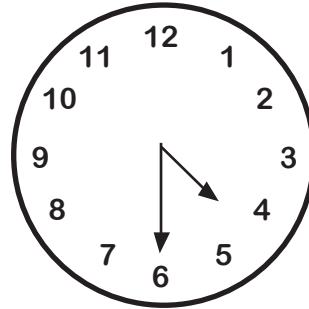
•  
•  
\_\_\_\_\_




•  
•  
\_\_\_\_\_



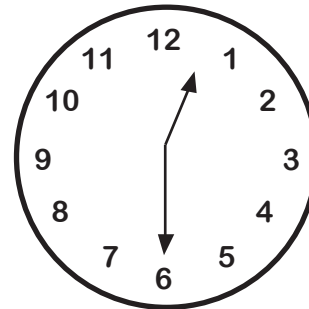
•  
•  
\_\_\_\_\_



•  
•  
\_\_\_\_\_



•  
•  
\_\_\_\_\_



•  
•  
\_\_\_\_\_