

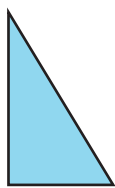
Symmetry

Look at each shape. Which drawing would complete the other half?
Color in the bubble next to the correct answer.




1.






2.



3.



4.



5.

