

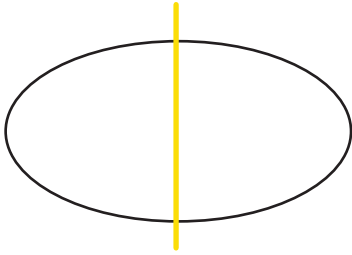
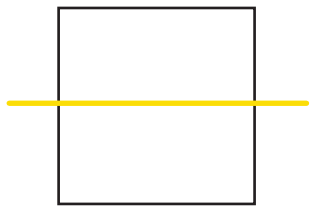
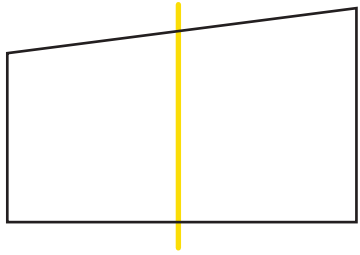
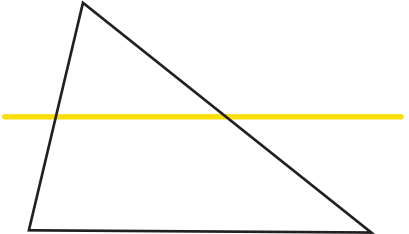
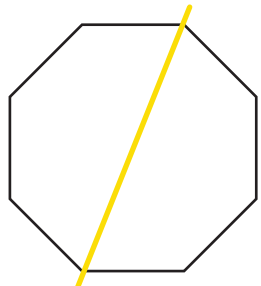
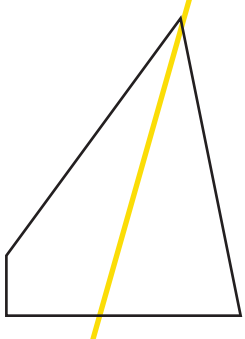

Name \_\_\_\_\_ Date \_\_\_\_\_

# Symmetrical Shapes

A symmetrical shape has two halves that look like mirror images of each other. An asymmetrical shape has two halves that do not make a mirror image.



Are these shapes symmetrical? Circle the correct answer.

 <p>symmetrical    asymmetrical</p>	 <p>symmetrical    asymmetrical</p>	 <p>symmetrical    asymmetrical</p>
 <p>symmetrical    asymmetrical</p>	 <p>symmetrical    asymmetrical</p>	 <p>symmetrical    asymmetrical</p>
<p>Draw a line of symmetry through the shape below.</p> 	<p>Draw your own symmetrical shape!</p>	