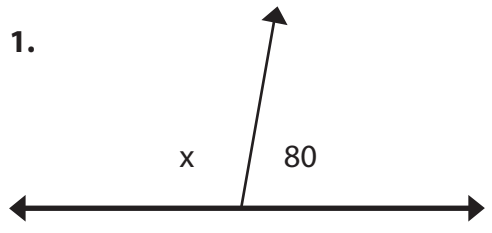
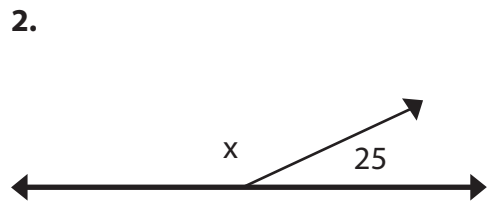
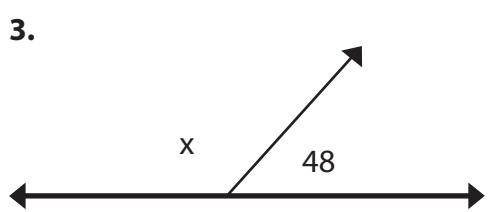


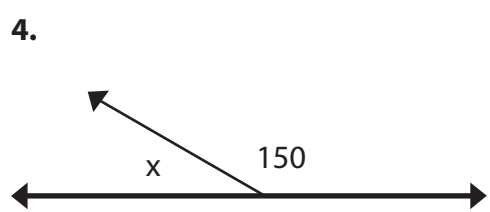
Supplementary Angles

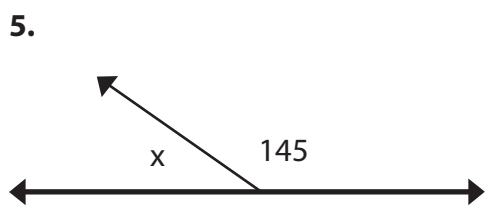
Solve for angle x.

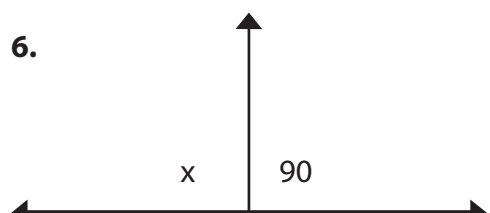
1. 
 $x = \underline{100}^\circ$
 $180 - 80 = 100$

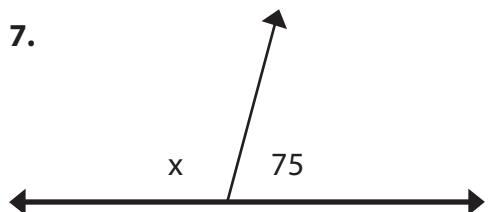
2. 
 $x = \underline{\hspace{2cm}}^\circ$

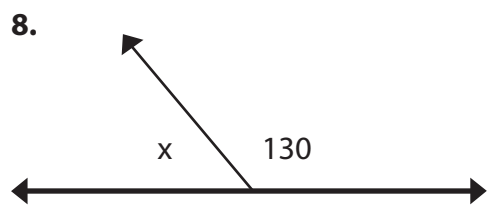
3. 
 $x = \underline{\hspace{2cm}}^\circ$

4. 
 $x = \underline{\hspace{2cm}}^\circ$

5. 
 $x = \underline{\hspace{2cm}}^\circ$

6. 
 $x = \underline{\hspace{2cm}}^\circ$

7. 
 $x = \underline{\hspace{2cm}}^\circ$

8. 
 $x = \underline{\hspace{2cm}}^\circ$