





# Superstar

Count the stars in each group. Write the number in the box. Write the sum in the last box.


$$\begin{array}{c} \star \\ \square \end{array} + \begin{array}{c} \star \star \\ \star \star \\ \star \star \\ \square \end{array} = \begin{array}{c} \star \star \star \\ \star \star \star \\ \square \end{array}$$


$$\begin{array}{c} \star \star \\ \star \star \\ \square \end{array} + \begin{array}{c} \star \star \\ \star \\ \square \end{array} = \begin{array}{c} \star \star \star \\ \star \star \star \\ \star \star \\ \square \end{array}$$


$$\begin{array}{c} \star \star \star \\ \star \star \star \\ \square \end{array} + \begin{array}{c} \star \star \\ \square \end{array} = \begin{array}{c} \star \star \star \\ \star \star \star \\ \star \star \\ \square \end{array}$$


$$\begin{array}{c} \star \star \star \\ \star \star \\ \square \end{array} + \begin{array}{c} \star \star \\ \star \star \\ \square \end{array} = \begin{array}{c} \star \star \star \\ \star \star \star \\ \star \star \star \\ \square \end{array}$$