



How Many Are Left?


Subtract the crossed out pictures and write the number in the box.



$$\begin{array}{r} 4 \\ -2 \\ \hline \end{array}$$



$$\begin{array}{r} 6 \\ -3 \\ \hline \end{array}$$



$$\begin{array}{r} 4 \\ -1 \\ \hline \end{array}$$



$$\begin{array}{r} 5 \\ -4 \\ \hline \end{array}$$