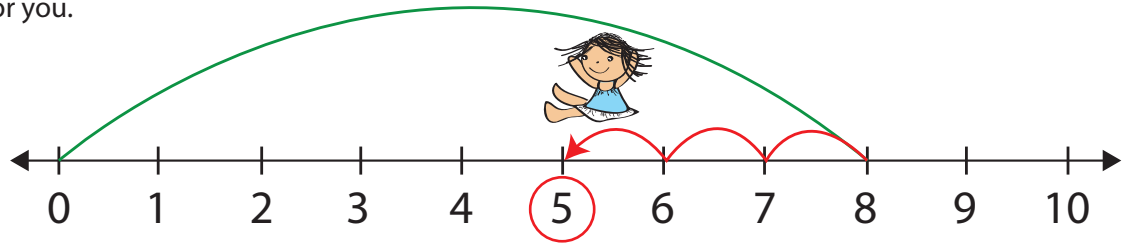


NUMBER LINE SUBTRACTION 3

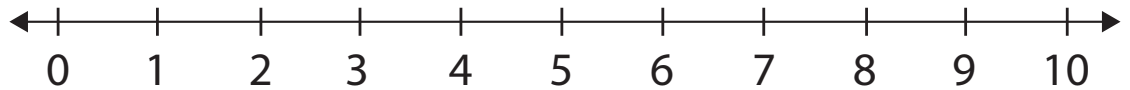
Solve the following problems using the number line. Show each problem on the number line, then write the answer. The first one is done for you.

$8 - 3 = 5$

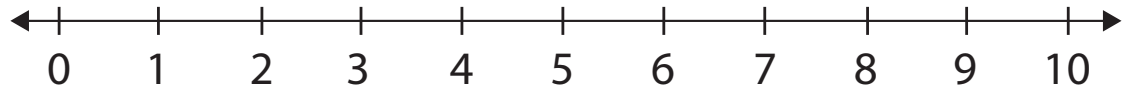


Parent tip: First ask your child to make one big jump from 0 to 8. Then ask him to jump backwards 3 times and circle the number he lands on.

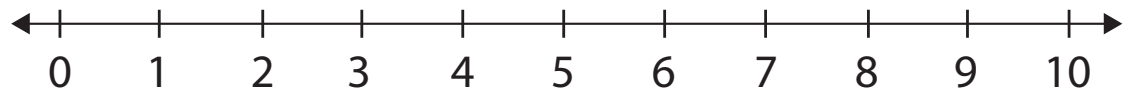
$8 - 2 = \dots\dots\dots$



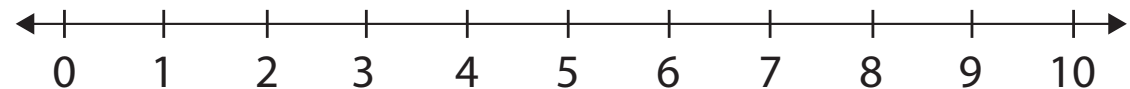
$4 - 4 = \dots\dots\dots$



$6 - 2 = \dots\dots\dots$



$9 - 5 = \dots\dots\dots$



$7 - 6 = \dots\dots\dots$

