





Name \_\_\_\_\_ Date \_\_\_\_\_

# Bird Subtraction

Count how many birds are in each box. Now take away the shaded pictures. How many are left? Write your answer in the box on the right.

	$\begin{array}{r} 4 \\ - 1 \\ \hline \end{array}$
	$\begin{array}{r} 5 \\ - 4 \\ \hline \end{array}$
	$\begin{array}{r} 7 \\ - 2 \\ \hline \end{array}$
	$\begin{array}{r} 6 \\ - 3 \\ \hline \end{array}$