


Let's Bake!

Subtraction


Count how many baking items are in each box. Now take away the darker pictures.
How many are left? Write your answer in the box on the right.

1




$$\begin{array}{r} 4 \\ -2 \\ \hline \end{array}$$

2




$$\begin{array}{r} 5 \\ -4 \\ \hline \end{array}$$

3



$$\begin{array}{r} 3 \\ -1 \\ \hline \end{array}$$

4



$$\begin{array}{r} 7 \\ -3 \\ \hline \end{array}$$