


Easter Egg Hunt

Subtraction


Count how many easter eggs are in each box. Now take away the darker pictures.
How many are left? Write your answer in the box on the right.

1




$$\begin{array}{r} 6 \\ -3 \\ \hline \end{array}$$

2




$$\begin{array}{r} 7 \\ -1 \\ \hline \end{array}$$

3



$$\begin{array}{r} 4 \\ -2 \\ \hline \end{array}$$

4



$$\begin{array}{r} 5 \\ -4 \\ \hline \end{array}$$