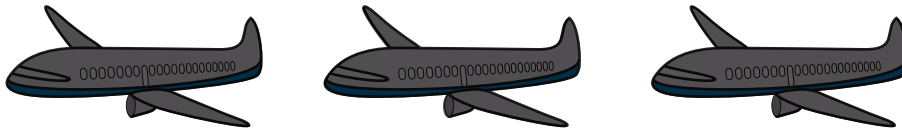


Let's Go!

Subtraction


Count how many vehicles are in each box. Now take away the darker pictures.
How many are left? Write your answer in the box on the right.

1




$$3 - 3 =$$

2



$$4 - 1 =$$

3



$$2 - 1 =$$

4



$$5 - 2 =$$
