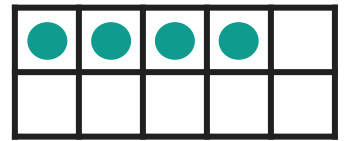
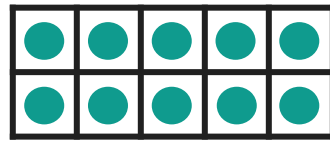
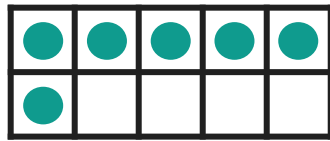



Subtracting Within 20

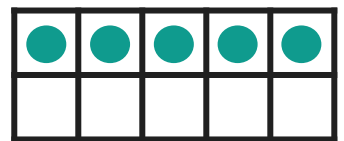

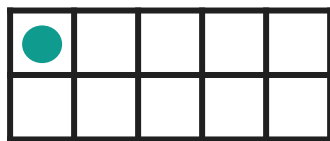

Using Ten Frames

Directions: Use the ten frames to subtract. Cross out circles to make the number sentence true. Then write the answer.



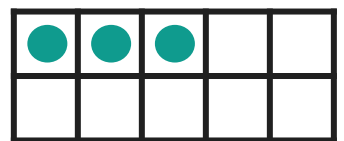



$$16 - 7 = \underline{\quad}$$

$$14 - 9 = \underline{\quad}$$



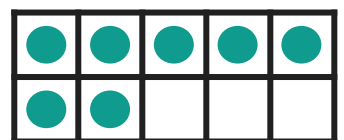
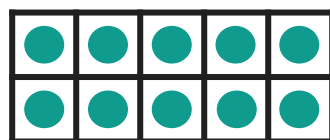
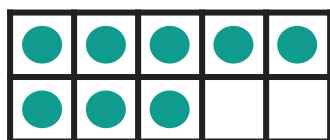

$$11 - 5 = \underline{\quad}$$

$$15 - 8 = \underline{\quad}$$



$$12 - 4 = \underline{\quad}$$

$$13 - 7 = \underline{\quad}$$



$$18 - 9 = \underline{\quad}$$

$$17 - 8 = \underline{\quad}$$