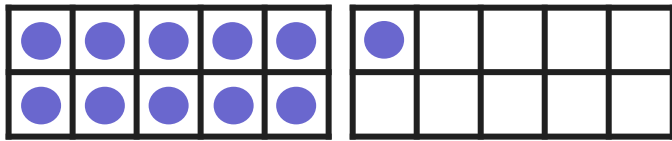
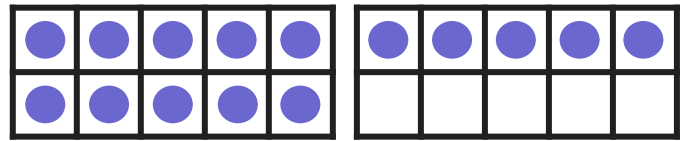


# Subtracting Within 20 Using Ten Frames: Missing Numbers

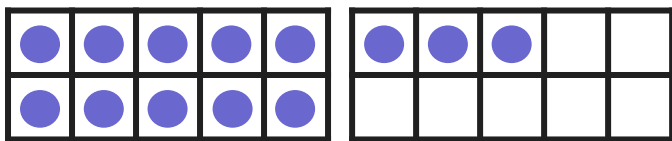
**Directions:** Use the ten frames to find the missing number. Cross out circles to make the number sentence true. Then write the answer.



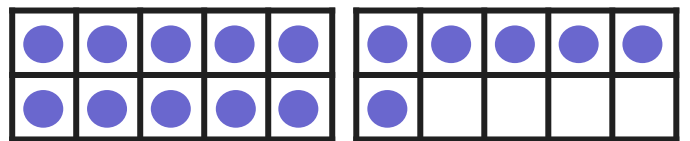
$$11 - \underline{\quad} = 8$$



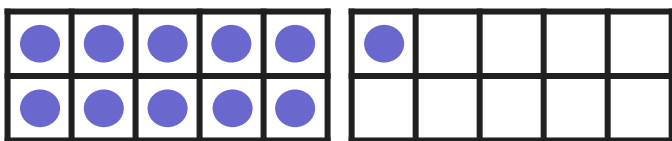
$$15 - \underline{\quad} = 6$$



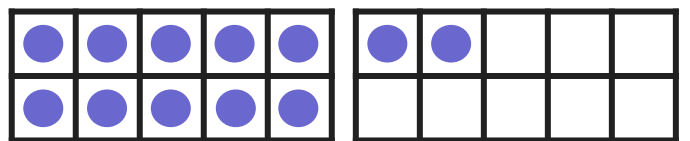
$$13 - \underline{\quad} = 7$$



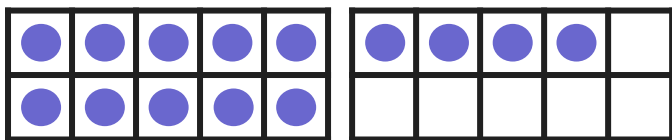
$$16 - \underline{\quad} = 8$$



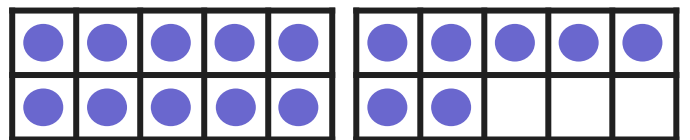
$$11 - \underline{\quad} = 4$$



$$12 - \underline{\quad} = 7$$



$$14 - \underline{\quad} = 5$$



$$17 - \underline{\quad} = 9$$