


Name _____

Date _____

SUBTRACTING MULTIPLES OF 100

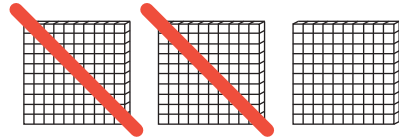
PART 1: Write the word, number, and base-ten block sketch for multiples of 100, up to 900. The first multiple of 100 is already drawn for you.

WORD	NUMBER	BASE-TEN BLOCK SKETCH
one hundred	100	

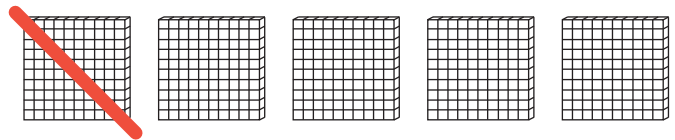
SUBTRACTING MULTIPLES OF 100

PART 2: Cut these cards out. Match the base-ten block sketch with the correct equation! Be sure to create your own equation and sketch on the blank flashcards using multiples of 100.

$$\begin{array}{r} 500 \\ - 100 \\ \hline 400 \end{array}$$



$$\begin{array}{r} 800 \\ - 300 \\ \hline 500 \end{array}$$



$$\begin{array}{r} 300 \\ - 200 \\ \hline 100 \end{array}$$

