





Subtract Numbers




Find the correct rocket!

Subtract the numbers in each box and color the rocket with the correct answer.


$4 - 1 = \underline{\quad}$




$1 - 1 = \underline{\quad}$




$5 - 1 = \underline{\quad}$




$8 - 1 = \underline{\quad}$




$7 - 6 = \underline{\quad}$




$2 - 1 = \underline{\quad}$



$7 - 1 = \underline{\quad}$



$9 - 1 = \underline{\quad}$



$10 - 1 = \underline{\quad}$

