

Subtract One

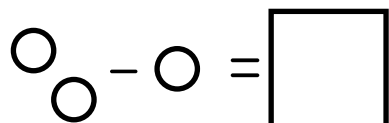
Name: _____

Date: _____

Complete each equation.

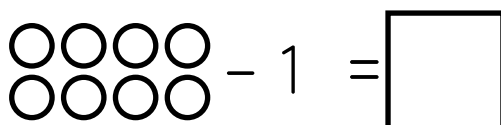
$3 - 1 = \square$

 $\square - 1 = \square$

 $\square - 1 = \square$

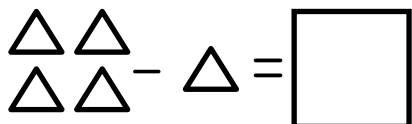
$2 - 1 = \square$

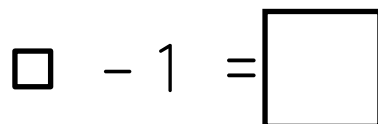
$6 - 1 = \square$

 $\square - 1 = \square$

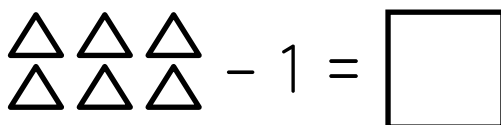
$8 - 1 = \square$

$9 - 1 = \square$

 $\square - 1 = \square$

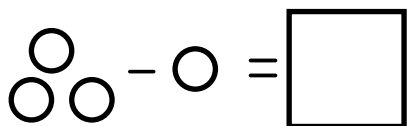
 $\square - 1 = \square$

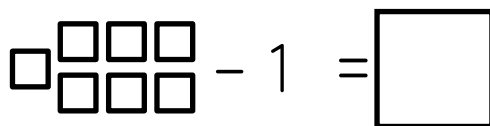
$5 - 1 = \square$

 $\square - 1 = \square$

$7 - 1 = \square$

$1 - 1 = \square$

 $\square - 1 = \square$

 $\square - 1 = \square$

$4 - 1 = \square$

 $\square - 1 = \square$