

Name: \_\_\_\_\_

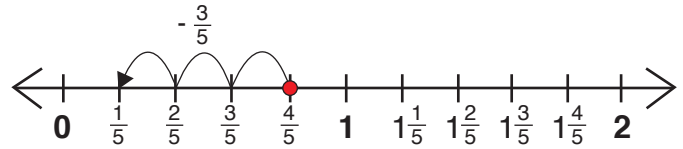
Date: \_\_\_\_\_

# Subtract Fractions

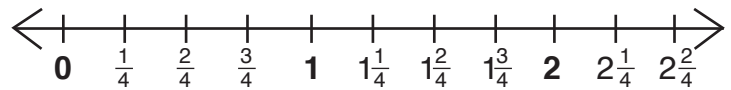
← on a Number Line →

**Directions:** Use each number line to subtract the fractions.  
Remember to fill in the missing numbers on the blank number lines!

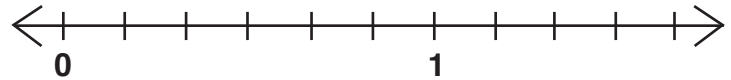
**Example:**  $\frac{4}{5} - \frac{3}{5} = \frac{1}{5}$



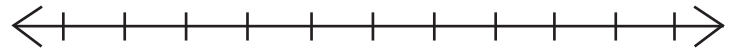
a)  $1\frac{3}{4} - \frac{2}{4} =$  \_\_\_\_\_



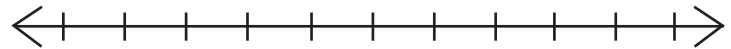
b)  $\frac{5}{6} - \frac{3}{6} =$  \_\_\_\_\_



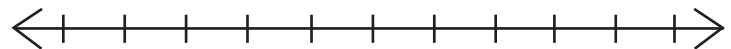
c)  $2\frac{1}{3} - \frac{2}{3} =$  \_\_\_\_\_



d)  $\frac{7}{8} - \frac{5}{8} =$  \_\_\_\_\_



e)  $1\frac{3}{5} - 1\frac{1}{5} =$  \_\_\_\_\_



**Challenge!**

f)  $\frac{1}{2} - \frac{3}{8} =$  \_\_\_\_\_

