


SPORT SUBTRACTION

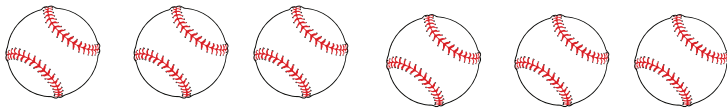
- Count all the objects in the group.
- Cross out 4 objects in each group to show how many you are subtracting.
- Count how many are left and write the answer.



$$8 - 4 = \underline{\quad}$$




$$7 - 4 = \underline{\quad}$$



$$6 - 4 = \underline{\quad}$$



$$5 - 4 = \underline{\quad}$$



$$4 - 4 = \underline{\quad}$$