


# Let's Practice Subtraction! 1-5


Use the drawings to solve the problems below.

**Example:**



5 take away 3 equals 2

$$5 - 3 = \underline{2}$$



$$4 - 3 = \underline{\quad}$$



$$2 - 1 = \underline{\quad}$$




$$3 - 1 = \underline{\quad}$$



$$5 - 2 = \underline{\quad}$$



$$3 - 2 = \underline{\quad}$$



$$5 - 1 = \underline{\quad}$$