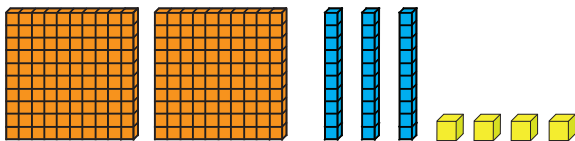
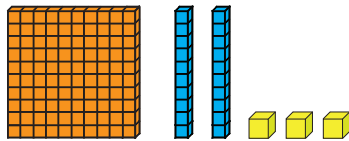


Strategy Cards: Three-Digit Addition

Directions: Match the base ten block cards to the corresponding standard algorithm cards. Think about which strategy makes the most sense to you and why!

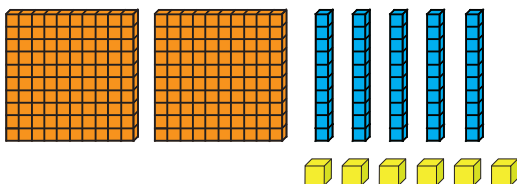
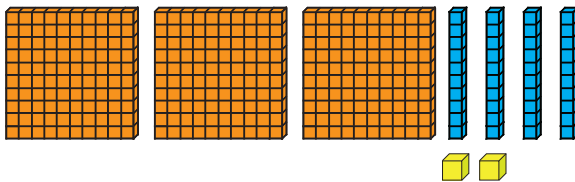
A) $123 + 234 = 357$



B)

H	T	O
1	2	3
+	2	3
2	3	4
3	5	7

C) $342 + 256 =$



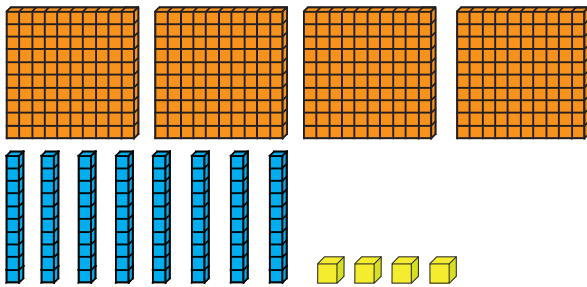
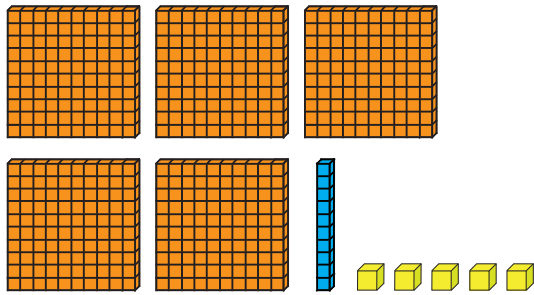
D)

H	T	O
3	4	2
+	2	5
2	5	6

Name: _____

Date: _____

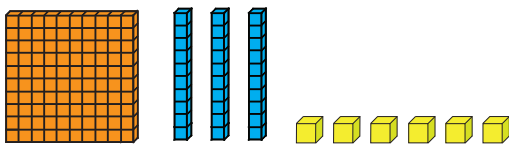
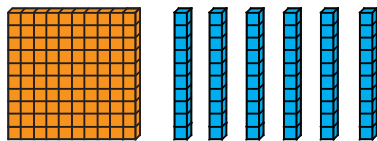
E) $515 + 484 =$



F)

H	T	O	
5	1	5	
+	4	8	4

G) $160 + 136 =$



H)

H	T	O	
1	6	0	
+	1	3	6