

How to Chart a Stem and Leaf Plot

1. The first number on the left is the stem and the number on the right is the leaf.

For example: 25 would be charted below

Stem	Leaf
2	5

2. If there are multiple values with the same stem, write the stem once and list the leaves.

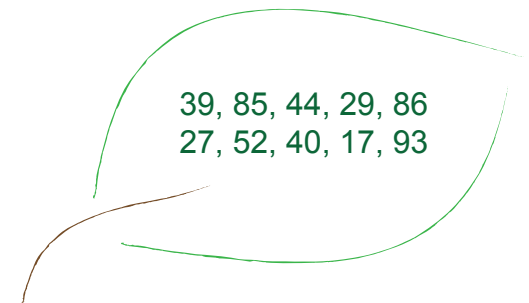
For example: 25, 23, and 28 would be charted below

Stem	Leaf
2	3 5 8

3. Be sure to list both stem and leaf values in order of least to greatest.

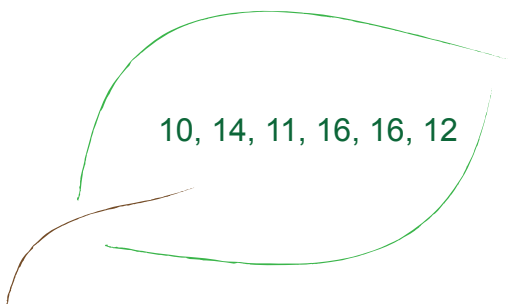
For example: 16, 13, 37, 34, 26, 21 would be charted below

Stem	Leaf
1	3 6
2	1 6
3	4 7

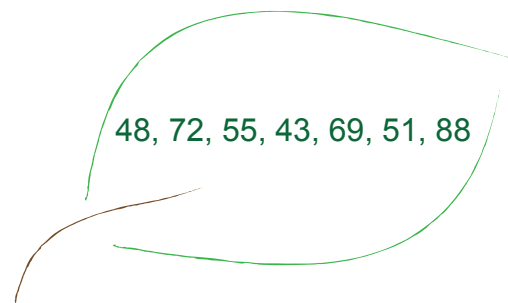


Stem	Leaf
------	------

Chart the following groups of numbers in their corresponding stem and leaf plot



Stem	Leaf
------	------



Stem	Leaf
------	------