




St. Patrick's Day Subtraction


Count the St. Patrick's Day items below. Then cross out the number of items to subtract them. How many are there? Write the total in the box.




$$6 - 1 = \boxed{\quad}$$



$$4 - 3 = \boxed{\quad}$$



$$5 - 2 = \boxed{\quad}$$



$$7 - 4 = \boxed{\quad}$$