



# Springtime Adding!


Add together the springtime objects in each box, then write your answer in the box on the right.




$$\begin{array}{r} 2 \\ + 2 \\ \hline \end{array}$$



$$\begin{array}{r} 3 \\ + 2 \\ \hline \end{array}$$



$$\begin{array}{r} 3 \\ + 1 \\ \hline \end{array}$$



$$\begin{array}{r} 2 \\ + 4 \\ \hline \end{array}$$